














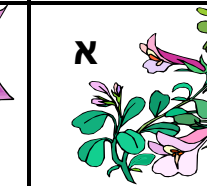




בי"ס 'בכור לוי'

כתות ה- תשפ"א

שם: \_\_\_\_\_

## פרחים במשבצת

המספרים המופיעים בלוח הם הסכומים של ערך הפרחים בכל טור ובכל שורה. השלימו את ערכו של כל פרח בלוח. היעזרו בנתונים שלפניכם. פרטו חישובים ודרך פתרון.

 א	 א	 א	 א	1
 ב	 ג	 ב	 ד	$3\frac{5}{8}$
 ג	 ד	 ג	 א	1
 ב	 ד	 א	 א	$2\frac{1}{2}$
$3\frac{3}{8}$	$1\frac{3}{8}$	$2\frac{1}{8}$	$1\frac{1}{4}$	סכום

